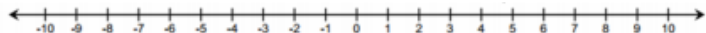


# Corrective Assignment

Model on the number line. Circle your answer.

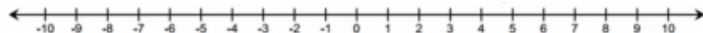
1.

$$-7 - 2$$



2.

$$9 - 6$$




Write an equation to represent the following.

3.



4.



Perform the indicated operation.

5.  $9 - 3$

6.  $8 + (-3)$

7.  $16 - (-5)$

8.  $-12 - 15$

9.  $-3 + (-3)$

10.  $-5 - (-9)$

11.  $-12 - 8$

12.  $10 + (-3)$

13.  $-15 + (-5)$

14.  $8 - (-13)$

15.  $-21 - 4$

16.  $12 - 18$

## ANSWERS TO 2.2 CORRECTIVE ASSIGNMENT

1. -9	2. 3	3. $3 - 5 = -2$	4. $7 - 4 = 3$	5. 6	6. 5	7. 21	8. -27
9. -6	10. 4	11. -20	12. 7	13. -20	14. 21	15. -25	16. -6